

Area of a Rectangle

Find the area of each rectangle.

1)



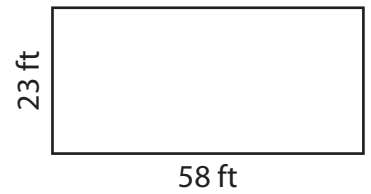
Area = _____

2)



Area = _____

3)



Area = _____

4)



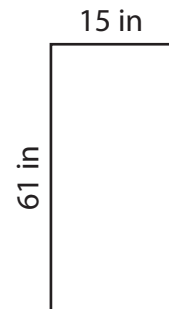
Area = _____

5)



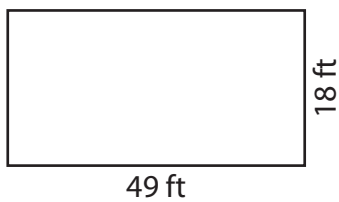
Area = _____

6)




Area = _____

7)



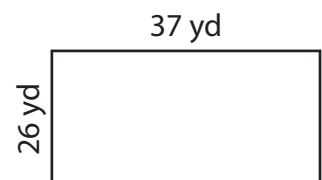
Area = _____

8)



Area = _____

9)



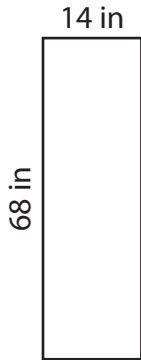
Area = _____

Area of a Rectangle

Answer Key

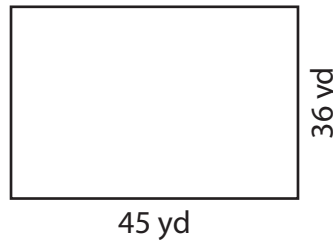
Find the area of each rectangle.

1)



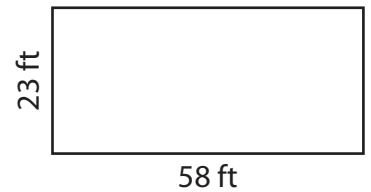
Area = 952 in²

2)



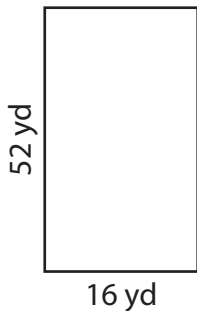
Area = 1,620 yd²

3)



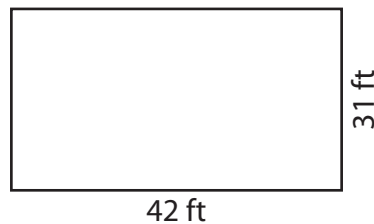
Area = 1,334 ft²

4)



Area = 832 yd²

5)



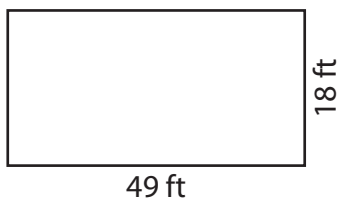
Area = 1,302 ft²

6)




Area = 915 in²

7)



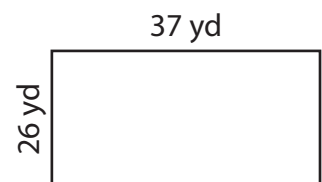
Area = 882 ft²

8)



Area = 1,150 in²

9)



Area = 962 yd²