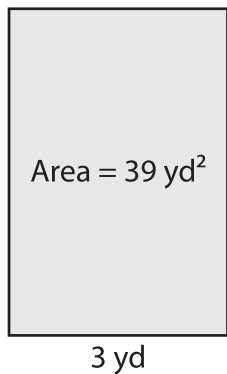


# Finding the Length or Width from Area

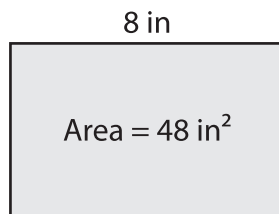
Find the length or width of each rectangle.

1)



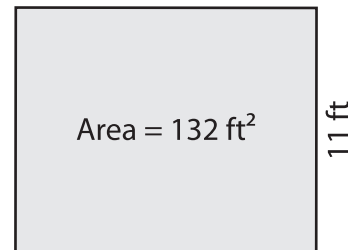
Length = \_\_\_\_\_

2)



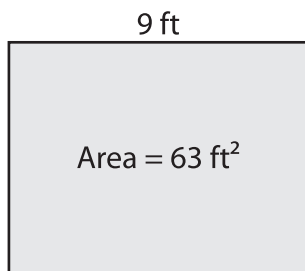
Width = \_\_\_\_\_

3)



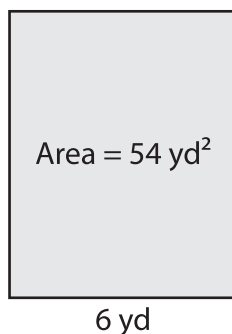
Length = \_\_\_\_\_

4)



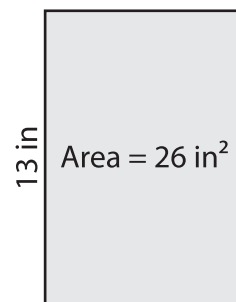
Width = \_\_\_\_\_

5)



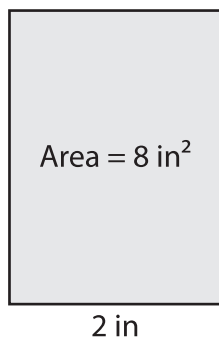
Length = \_\_\_\_\_

6)



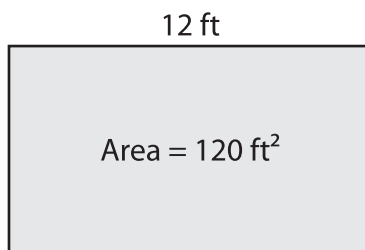
Width = \_\_\_\_\_

7)



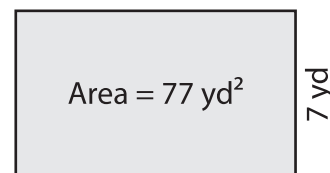
Length = \_\_\_\_\_

8)



Width = \_\_\_\_\_

9)



Length = \_\_\_\_\_