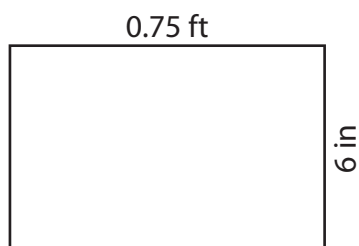


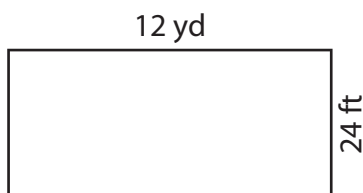
# Area of a Rectangle

Find the area of each rectangle.

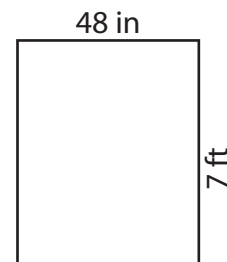
1)



2)



3)



Area

# Preview

ft<sup>2</sup>

4)

Become a member to unlock  
unrestricted access to both printable  
and online worksheets.

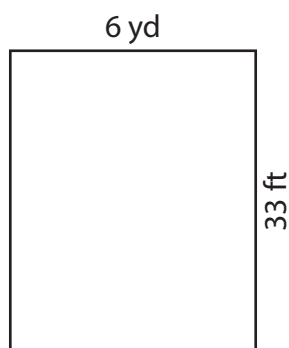
Area

yd<sup>2</sup>

www.tutoringhour.com

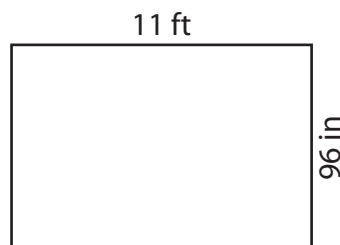


7)




Area = \_\_\_\_\_ yd<sup>2</sup>

8)



Area = \_\_\_\_\_ ft<sup>2</sup>

9)



Area = \_\_\_\_\_ in<sup>2</sup>