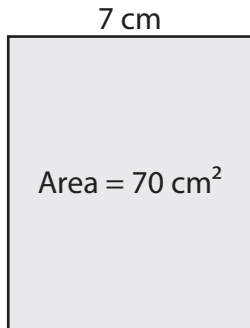


# Finding the Length or Width

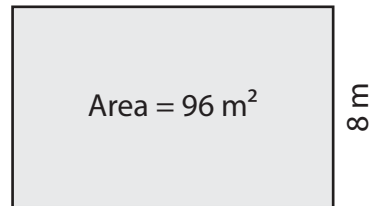
Find the length or width of each rectangle.

1)



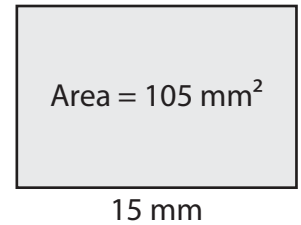
Length = \_\_\_\_\_

2)



Length = \_\_\_\_\_

3)



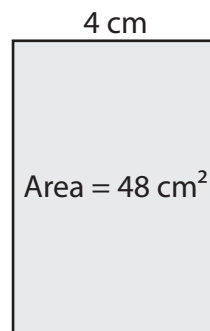
Width = \_\_\_\_\_

4)



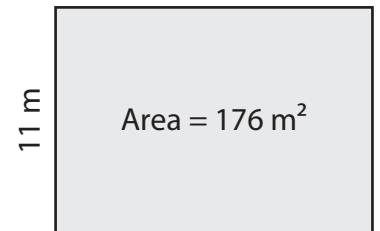
Width = \_\_\_\_\_

5)



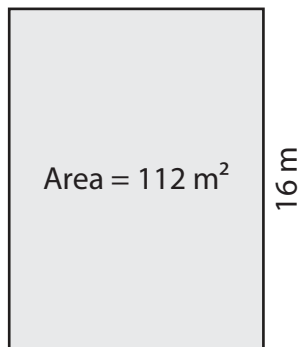
Length = \_\_\_\_\_

6)



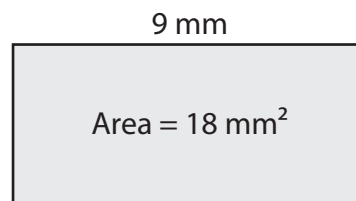
Length = \_\_\_\_\_

7)



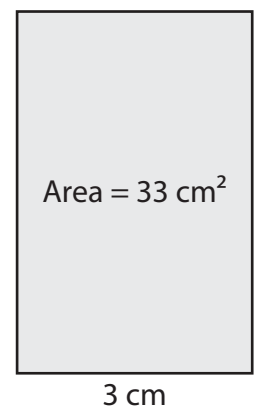
Width = \_\_\_\_\_

8)



Width = \_\_\_\_\_

9)



Length = \_\_\_\_\_