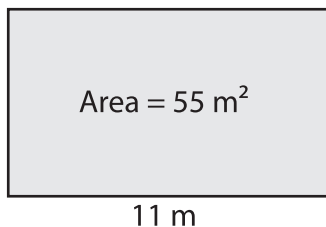


# Finding the Length or Width from Area

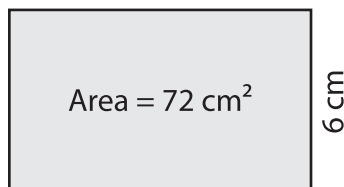
Find the length or width of each rectangle.

1)



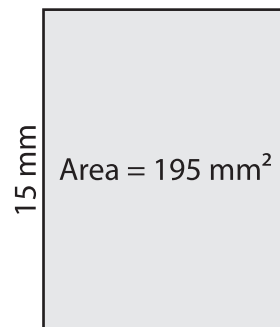
Width = \_\_\_\_\_

2)



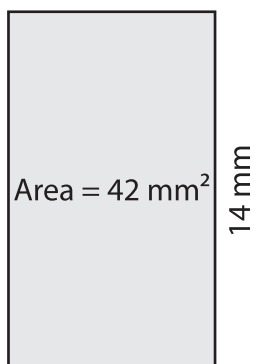
Length = \_\_\_\_\_

3)



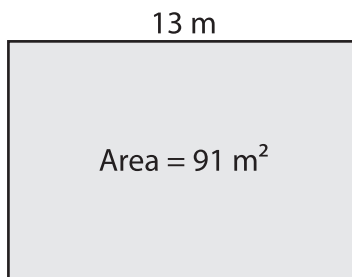
Width = \_\_\_\_\_

4)



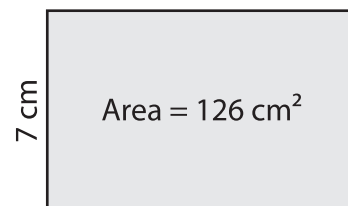
Width = \_\_\_\_\_

5)



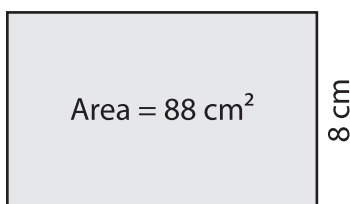
Width = \_\_\_\_\_

6)



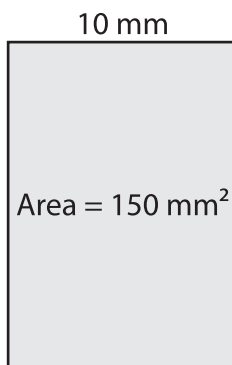
Length = \_\_\_\_\_

7)



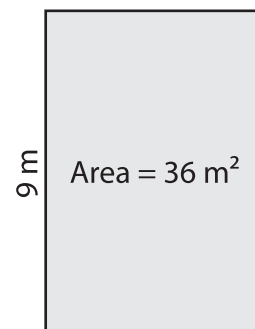
Length = \_\_\_\_\_

8)



Length = \_\_\_\_\_

9)



Width = \_\_\_\_\_