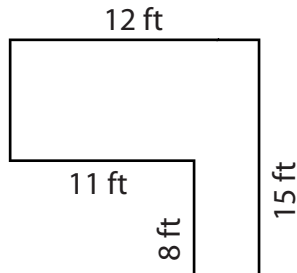


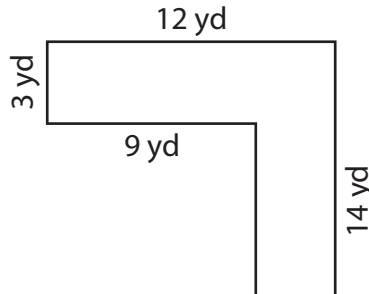
# Area of Rectilinear Figures

Find the area of each figure.

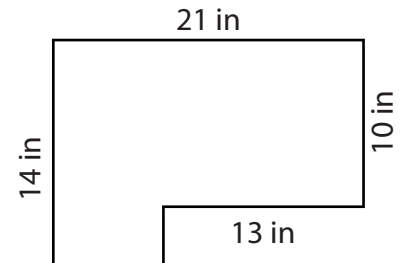
1)



2)



3)



A

# Preview

4)

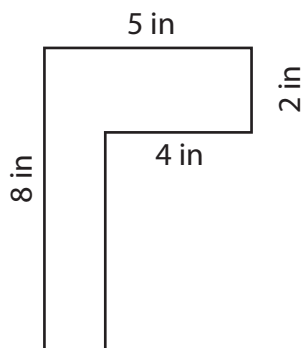
Become a member to unlock  
unrestricted access to both printable  
and online worksheets.

A

[www.tutoringhour.com](http://www.tutoringhour.com)

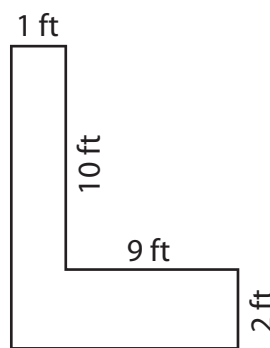


7)



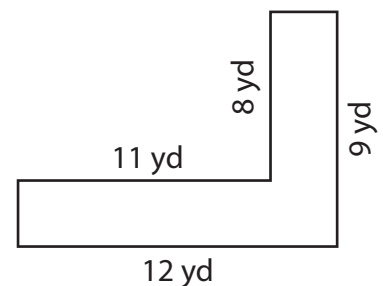
Area = \_\_\_\_\_

8)



Area = \_\_\_\_\_

9)



Area = \_\_\_\_\_