

Area of a Square

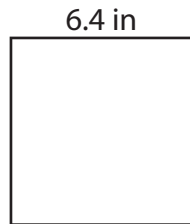
Find the area of each square.

1)



Area = _____

2)



4)

Area = _____

3)




Preview

Become a member to unlock
unrestricted access to both printable
and online worksheets.




www.tutoringhour.com

7)



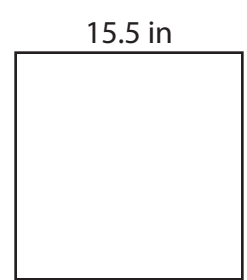
Area = _____

8)



Area = _____

9)



Area = _____