


Area and Perimeter of a Square

Find the area and perimeter of each square.

1)




2.6 in

Area = _____

Perimeter = _____

2)

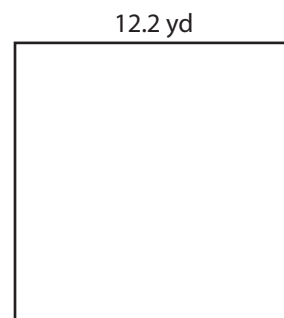


8.4 ft

Area = _____

Perimeter = _____

3)

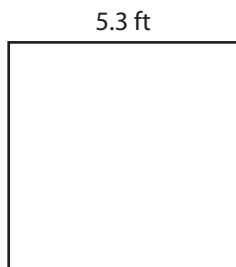


12.2 yd

Area = _____

Perimeter = _____

4)



5.3 ft

Area = _____

Perimeter = _____

5)



9.8 yd

Area = _____

Perimeter = _____

6)



1.5 in

Area = _____

Perimeter = _____

7)




7.1 yd

Area = _____

Perimeter = _____

8)



10.7 in

Area = _____

Perimeter = _____

9)



4.9 ft

Area = _____

Perimeter = _____