

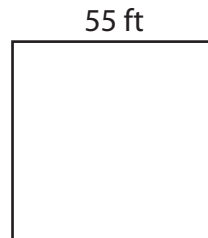
Area of a Square

Find the area of each square.


1)



2)



3)



4)

Ar

Preview

Become a member to unlock
unrestricted access to both printable
and online worksheets.

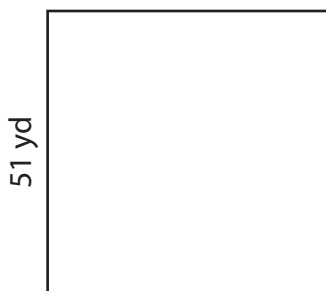


Ar

www.tutoringhour.com


29 in

7)



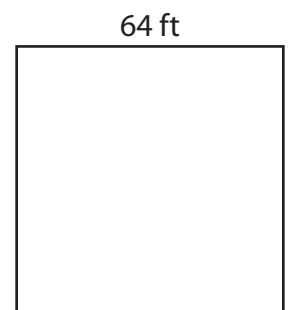
Area = _____

8)



Area = _____

9)



Area = _____