


Area of a Square


Find the area of each square.

1)

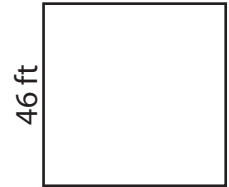


Ar

2)



3)



4)

Ar

Preview

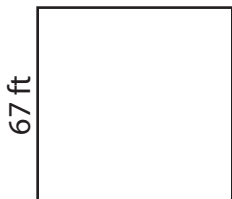
Become a member to unlock
unrestricted access to both printable
and online worksheets.



www.tutoringhour.com


25 yd

7)



Area = _____

8)



Area = _____

9)



Area = _____