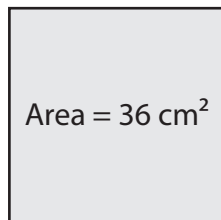


Side Length of a Square

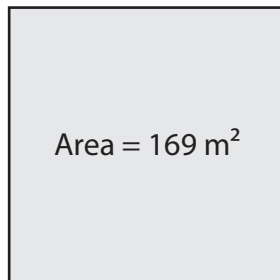
Find the side length of each square using the given area.

1)



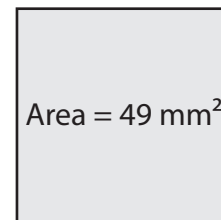
Side length = _____

2)



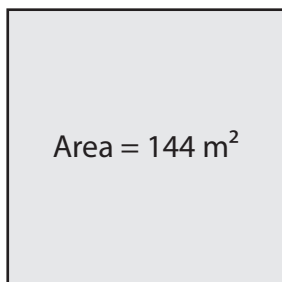
Side length = _____

3)



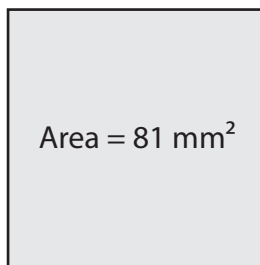
Side length = _____

4)



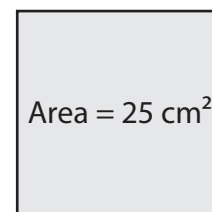
Side length = _____

5)



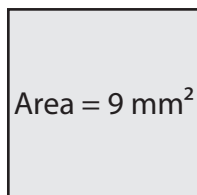
Side length = _____

6)



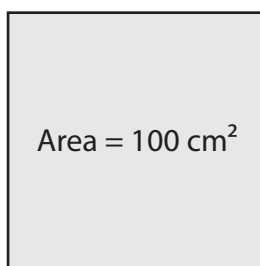
Side length = _____

7)



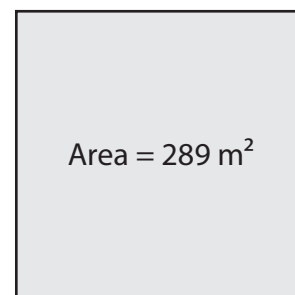
Side length = _____

8)



Side length = _____

9)



Side length = _____