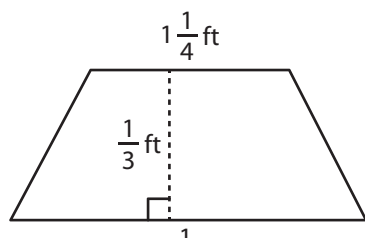


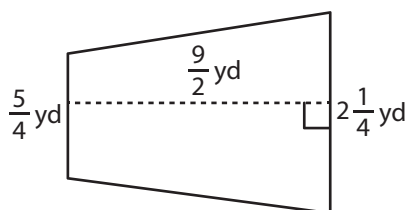
Area of a Trapezoid

Find the area of each trapezoid.

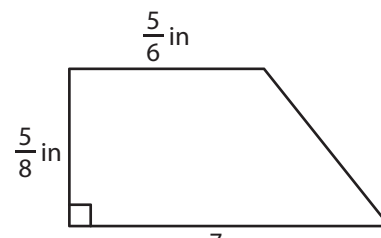
1)



2)



3)



Ar

Preview

4)

Become a member to unlock
unrestricted access to both printable
and online worksheets.

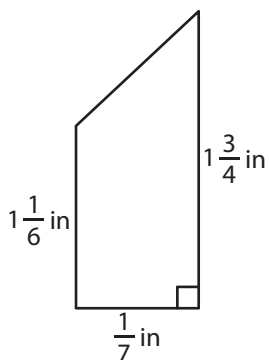
ft

Ar

www.tutoringhour.com

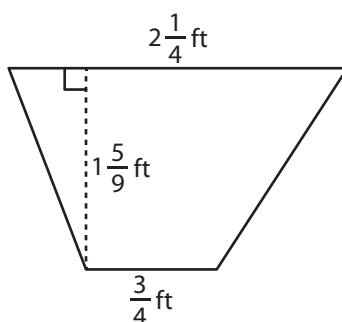


7)



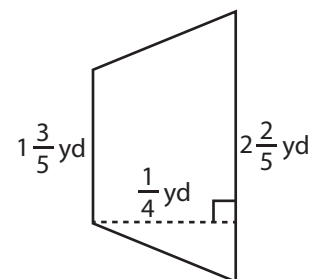
Area = _____

8)



Area = _____

9)



Area = _____