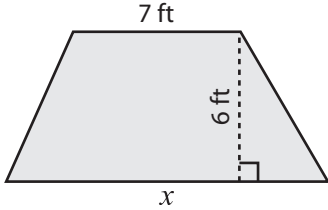


Trapezoid | Missing Dimension

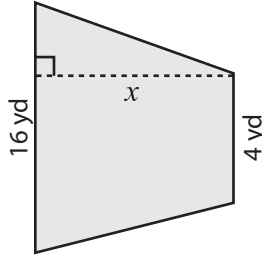
Find x .

1) Area = 57 ft^2



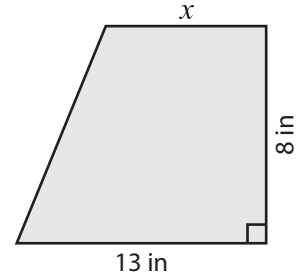
$x =$ _____

2) Area = 80 yd^2



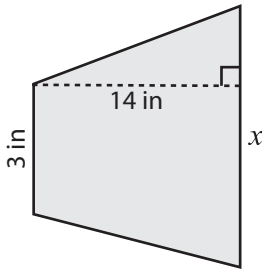
$x =$ _____

3) Area = 72 in^2



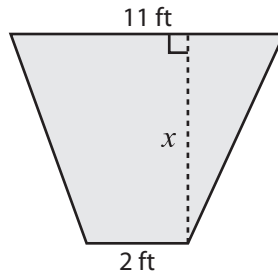
$x =$ _____

4) Area = 126 in^2



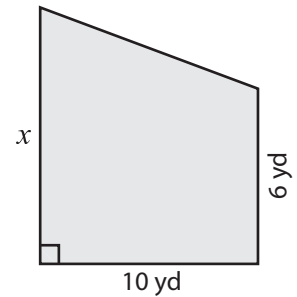
$x =$ _____

5) Area = 65 ft^2



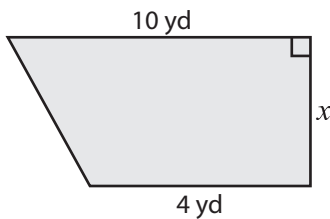
$x =$ _____

6) Area = 100 yd^2



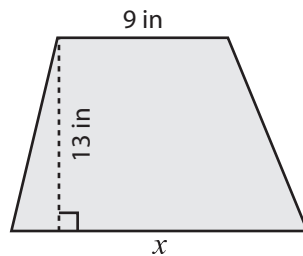
$x =$ _____

7) Area = 21 yd^2



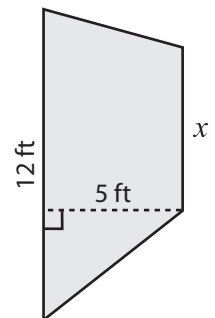
$x =$ _____

8) Area = 169 in^2



$x =$ _____

9) Area = 45 ft^2



$x =$ _____