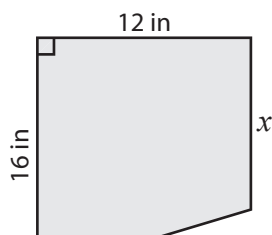


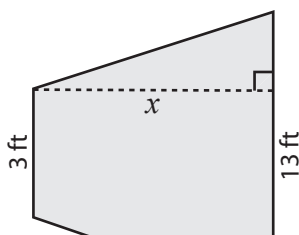
Trapezoid | Missing Dimension

Find x .

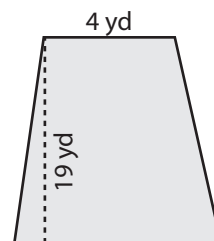
1) Area = 150 in^2



2) Area = 88 ft^2



3) Area = 114 yd^2



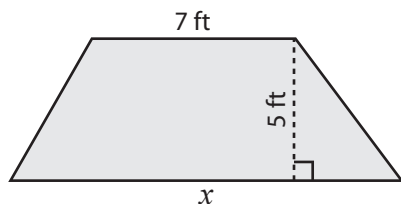
Preview

Become a member to unlock
unrestricted access to both printable
and online worksheets.



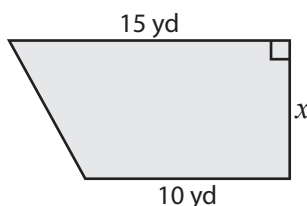
www.tutoringhour.com

7) Area = 75 ft^2



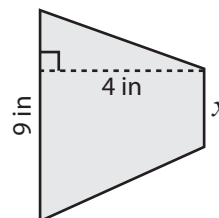
$x =$ _____

8) Area = 50 yd^2



$x =$ _____

9) Area = 22 in^2



$x =$ _____