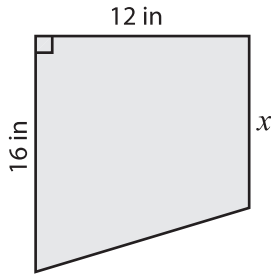


Trapezoid | Missing Dimension

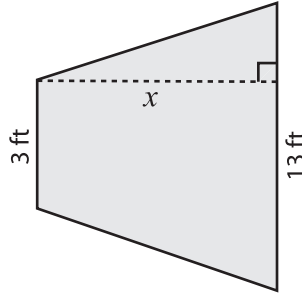
Find x .

1) Area = 150 in^2



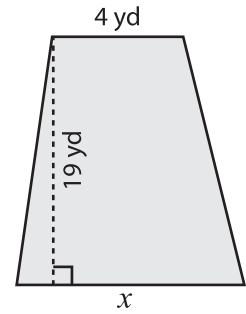
$x =$ _____

2) Area = 88 ft^2



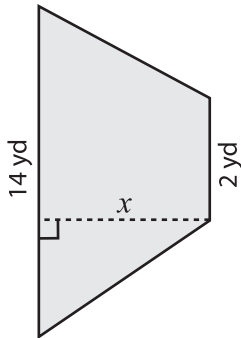
$x =$ _____

3) Area = 114 yd^2



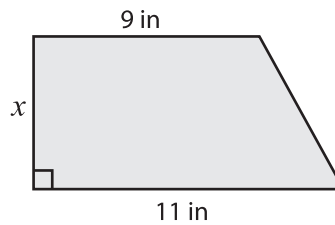
$x =$ _____

4) Area = 56 yd^2



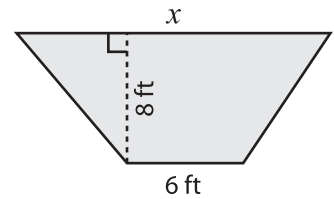
$x =$ _____

5) Area = 40 in^2



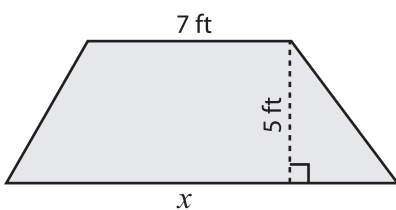
$x =$ _____

6) Area = 96 ft^2



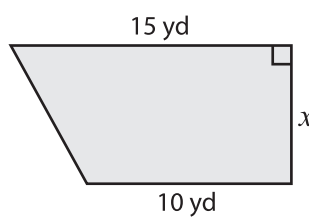
$x =$ _____

7) Area = 75 ft^2



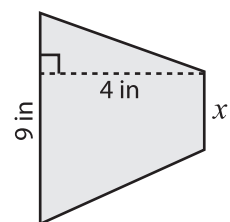
$x =$ _____

8) Area = 50 yd^2



$x =$ _____

9) Area = 22 in^2



$x =$ _____