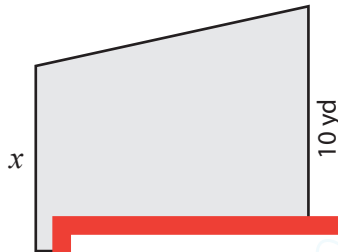


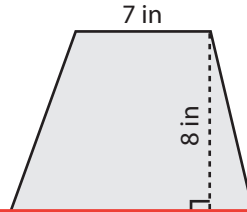
# Trapezoid | Missing Dimension

Find  $x$ .

1) Area =  $135 \text{ yd}^2$



2) Area =  $76 \text{ in}^2$



3) Area =  $35 \text{ ft}^2$



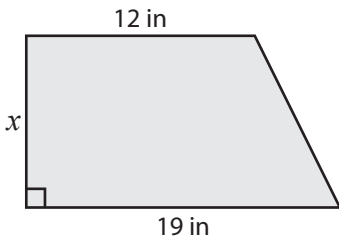
## Preview

Become a member to unlock  
unrestricted access to both printable  
and online worksheets.



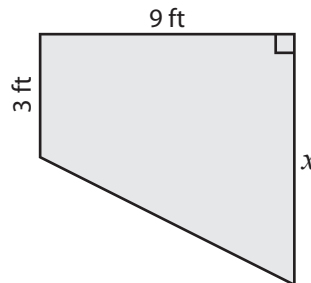
[www.tutoringhour.com](http://www.tutoringhour.com)

7) Area =  $155 \text{ in}^2$



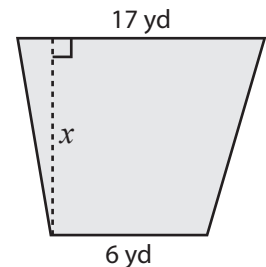
$x =$  \_\_\_\_\_

8) Area =  $54 \text{ ft}^2$



$x =$  \_\_\_\_\_

9) Area =  $161 \text{ yd}^2$



$x =$  \_\_\_\_\_