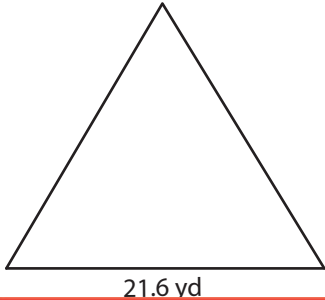


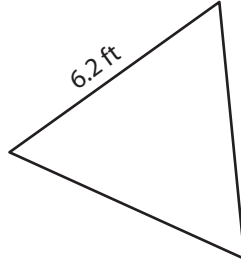
Area of Equilateral Triangles | Decimals

Find the area of each equilateral triangle. Round your answer to two decimal places.

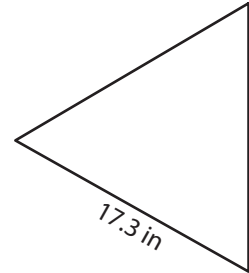
1)



2)



3)



Preview

Become a member to unlock
unrestricted access to both printable
and online worksheets.



www.tutoringhour.com

- 7) A triangular sunshade canopy has equal side lengths of 22.3 feet. Calculate the area of the canopy.