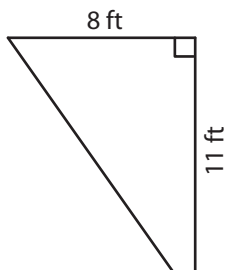


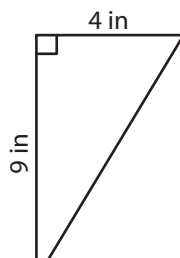
Area of Right Triangles | Integers

Find the area of each right triangle.

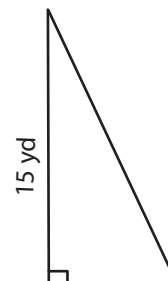
1)



2)



3)



4)

7)

Preview

Become a member to unlock
unrestricted access to both printable
and online worksheets.

www.tutoringhour.com



banner measured 3 feet and 4 feet, what was the area?

- 8) Jared wanted to paint the wooden mosaic tiles in his living room. If the sides of the tile formed a right triangle and the shorter sides measured 6 inches and 8 inches, how much area should Jared paint in each tile?
