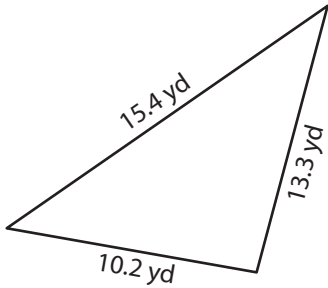


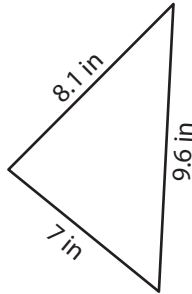
## Area of Scalene Triangles | Decimals

Find the area of each scalene triangle. Round your answer to two decimal places.

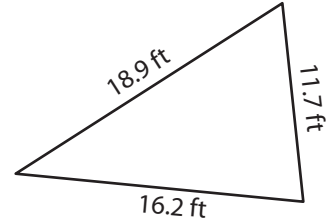
1)



2)



3)



4)

# Preview

5)

Become a member to unlock  
unrestricted access to both printable  
and online worksheets.

6)

[www.tutoringhour.com](http://www.tutoringhour.com)

- 7) Eve cuts out a piece of paper in the shape of a triangle to make a chart for her class. If the sides of the chart measure 11.2 inches, 19.5 inches, and 18.5 inches, how much paper does she use to make the chart?