






# Bar Graph | Birds

Albert conducts a survey among the zoo visitors to find their favorite bird. He records his findings in a table. Using the given information, write the title of the bar graph, label the axis, and graph the data.

Pigeon	Duck	Penguin	Flamingo	Peacock
				
27	12	18	21	15

