

# Base Ten Blocks | Tens & Ones


How many tens can you form? Also find the ones that left over.

1)



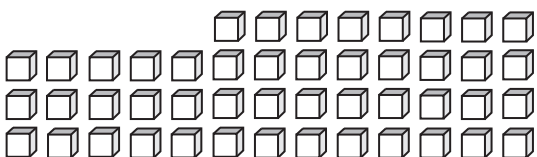
\_\_\_\_\_ tens \_\_\_\_\_ ones

2)



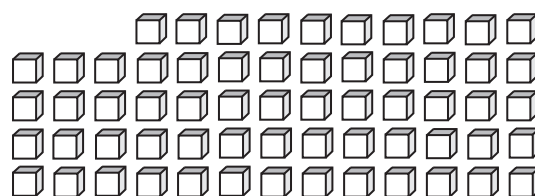
\_\_\_\_\_ tens \_\_\_\_\_ ones

3)



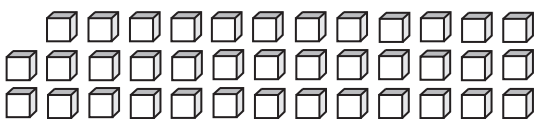
\_\_\_\_\_ tens \_\_\_\_\_ ones

4)



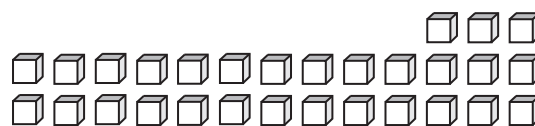
\_\_\_\_\_ tens \_\_\_\_\_ ones

5)




\_\_\_\_\_ tens \_\_\_\_\_ ones

6)



\_\_\_\_\_ tens \_\_\_\_\_ ones

7)



\_\_\_\_\_ tens \_\_\_\_\_ ones

8)



\_\_\_\_\_ tens \_\_\_\_\_ ones