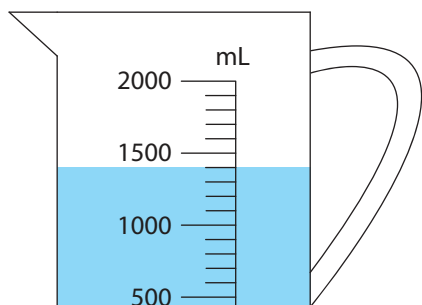


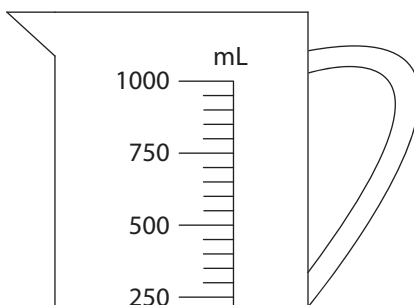
# Reading Measuring Jugs

Write the reading shown on each measuring jug.

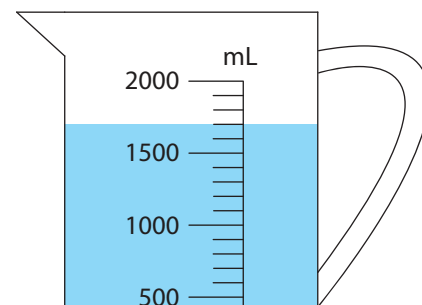
1)



2)



3)



4)

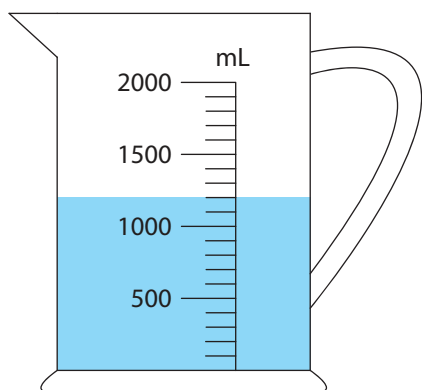
# Preview

Become a member to unlock  
unrestricted access to both printable  
and online worksheets.



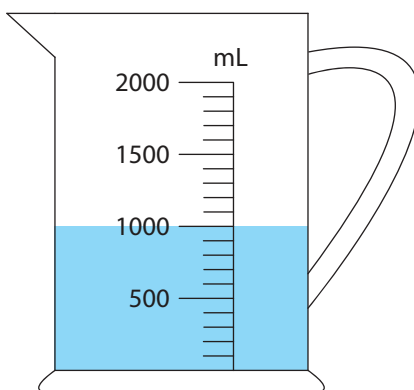
[www.tutoringhour.com](http://www.tutoringhour.com)

7)



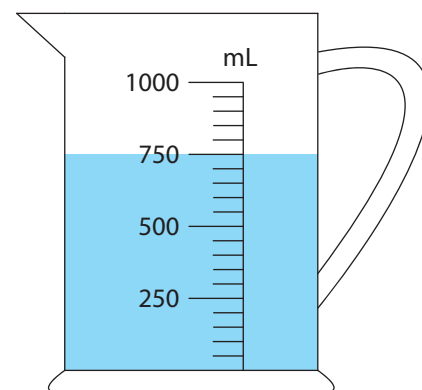
\_\_\_\_\_ mL

8)



\_\_\_\_\_ mL

9)



\_\_\_\_\_ mL