




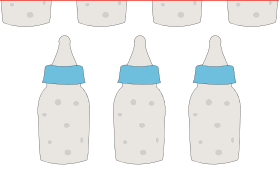






Measuring Capacity | Customary Units

Write the capacity of each individual container.

1)	 21 pt	  = _____ pt
2)	<div style="border: 2px solid red; padding: 10px;"> <h2 style="color: blue;">Preview</h2> <p style="color: blue; font-weight: bold;">Become a member to unlock unrestricted access to both printable and online worksheets.</p>  <p>www.tutoringhour.com</p> </div>	
3)		
4)	 7 fl.oz	  = _____ fl.oz
5)	 10 qt	  = _____ qt