



Chicken Life Cycle


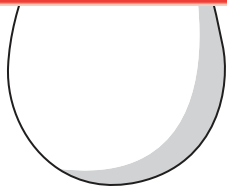
Observe each picture, figure out which stage in the life cycle of a chicken it represents, and shade the appropriate number.



Preview

Become a member to unlock
unrestricted access to both printable
and online worksheets.

www.tutoringhour.com



1	2	3
4	5	6

1	2	3
4	5	6

1	2	3
4	5	6