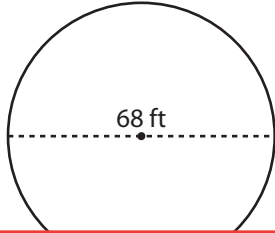


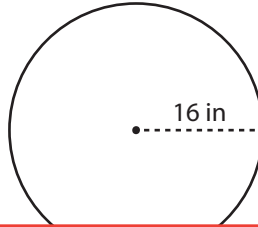
Area and Circumference

Find the area and circumference of each circle. Round your answer to the nearest tenth. (Use 3.14 for π .)

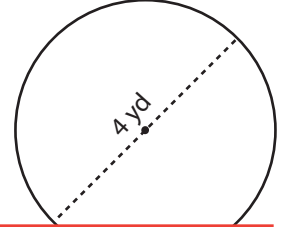
1)



2)



3)



4)

Circ

Preview

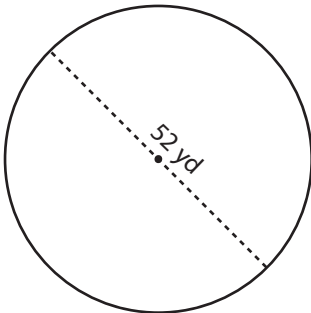
Become a member to unlock
unrestricted access to both printable
and online worksheets.



Circ

www.tutoringhour.com

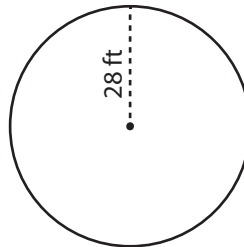
7)



Area: _____

Circumference: _____

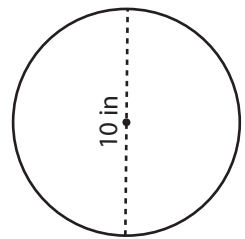
8)



Area: _____

Circumference: _____

9)



Area: _____

Circumference: _____