

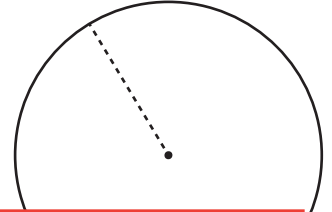
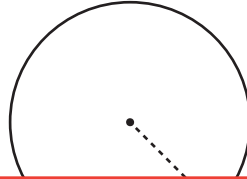
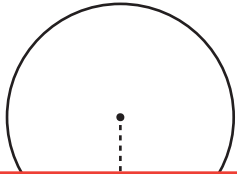
Area and Circumference

Find the area of each circle using the given circumference. Round your answer to the nearest tenth. (Use 3.14 for π .)

1) Circumference: 35 in

2) Circumference: 27 ft

3) Circumference: 169.5 yd



Preview

Become a member to unlock
unrestricted access to both printable
and online worksheets.



www.tutoringhour.com

4) Circ

ft

7) Circumference: 87.8 ft

8) Circumference: 133.1 yd

9) Circumference: 43 in

