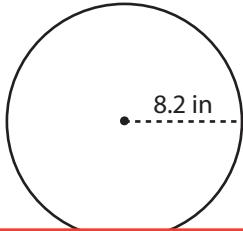


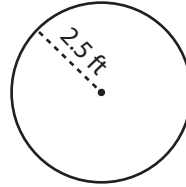
Radius and Diameter

Find the radius or diameter of each circle. Round your answer to the nearest tenth.

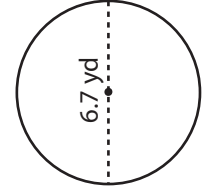
1)



2)



3)



Di

Preview

4)

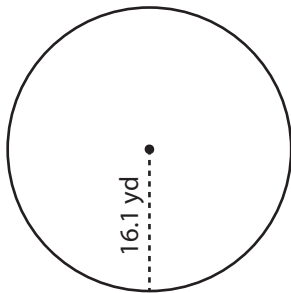
Become a member to unlock
unrestricted access to both printable
and online worksheets.

Di

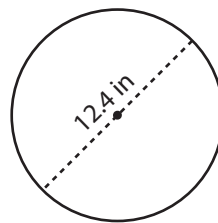


www.tutoringhour.com

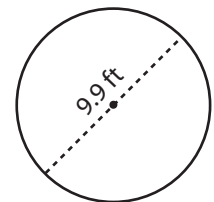
7)



8)



9)



Diameter = _____

Radius = _____

Radius = _____