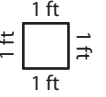
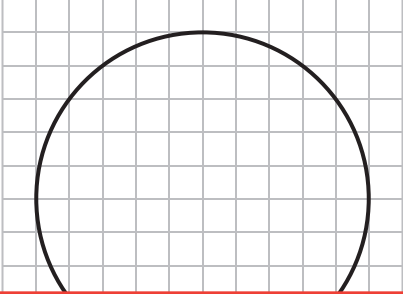


# Radius and Diameter

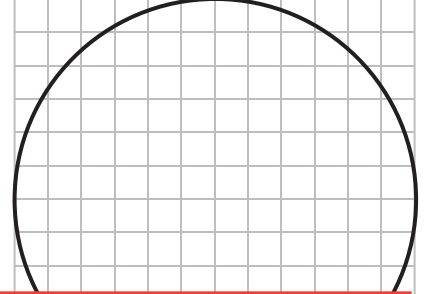
Count the squares and estimate the radius or diameter of the circle in each grid.



1)



2)



3)

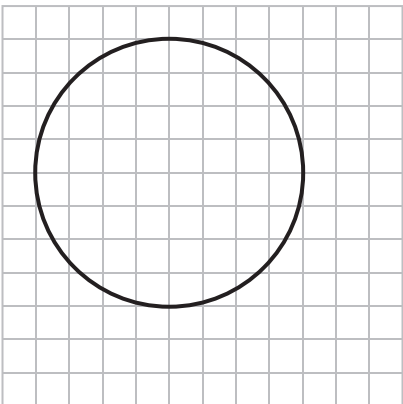
## Preview

Become a member to unlock  
unrestricted access to both printable  
and online worksheets.



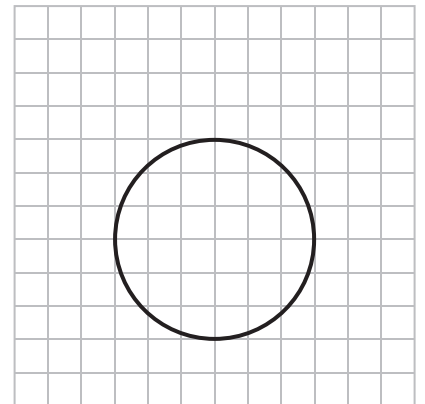
[www.tutoringhour.com](http://www.tutoringhour.com)

5)



Diameter = \_\_\_\_\_

6)



Radius = \_\_\_\_\_