


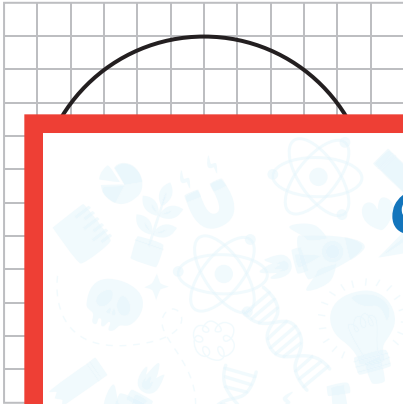
Radius and Diameter

Count the squares and estimate the radius or diameter of the circle in each grid.

1) scale: $\begin{matrix} 2\text{yd} & & 2\text{yd} \\ \text{yd} & \square & \text{yd} \\ 2\text{yd} & & 2\text{yd} \end{matrix}$

2) scale: $\begin{matrix} 3\text{in} & & 3\text{in} \\ \text{in} & \square & \text{in} \\ 3\text{in} & & 3\text{in} \end{matrix}$

3) scale: $\begin{matrix} 4\text{ft} & & 4\text{ft} \\ \text{ft} & \square & \text{ft} \\ 4\text{ft} & & 4\text{ft} \end{matrix}$



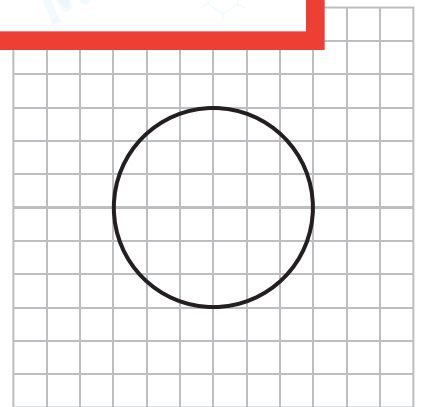
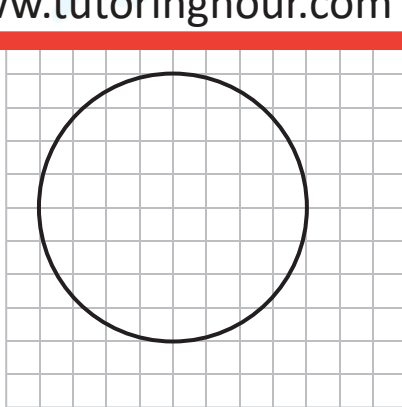
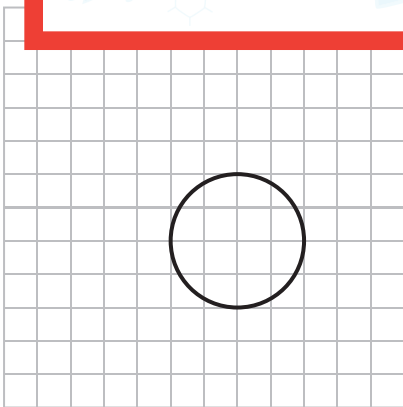
Preview

Become a member to unlock
unrestricted access to both printable
and online worksheets.



www.tutoringhour.com

4) scale:



Diameter = _____

Diameter = _____

Radius = _____