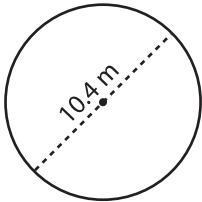


# Finding Radius and Diameter

Find the radius and diameter of each circle. Round your answer to the nearest tenth.

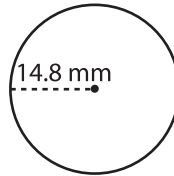
1)



Radius = \_\_\_\_\_

Diameter = \_\_\_\_\_

2)



Radius = \_\_\_\_\_

Diameter = \_\_\_\_\_

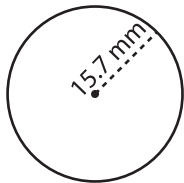
3)



Radius = \_\_\_\_\_

Diameter = \_\_\_\_\_

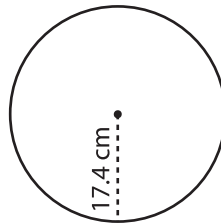
4)



Radius = \_\_\_\_\_

Diameter = \_\_\_\_\_

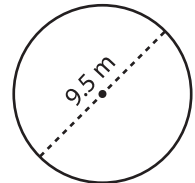
5)



Radius = \_\_\_\_\_

Diameter = \_\_\_\_\_

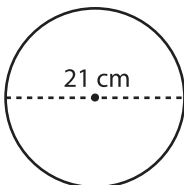
6)



Radius = \_\_\_\_\_

Diameter = \_\_\_\_\_

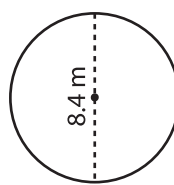
7)



Radius = \_\_\_\_\_

Diameter = \_\_\_\_\_

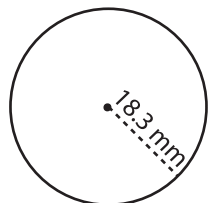
8)



Radius = \_\_\_\_\_

Diameter = \_\_\_\_\_

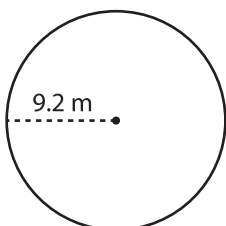
9)



Radius = \_\_\_\_\_

Diameter = \_\_\_\_\_

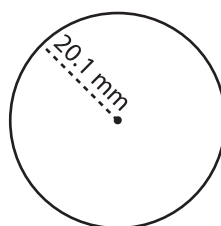
10)



Radius = \_\_\_\_\_

Diameter = \_\_\_\_\_

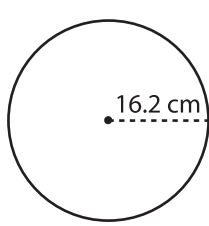
11)



Radius = \_\_\_\_\_

Diameter = \_\_\_\_\_

12)



Radius = \_\_\_\_\_

Diameter = \_\_\_\_\_