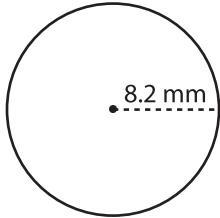


Finding Radius and Diameter

Find the radius and diameter of each circle. Round your answer to the nearest tenth.

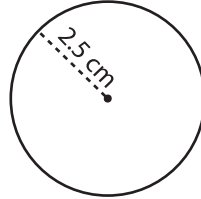
1)



Radius = _____

Diameter = _____

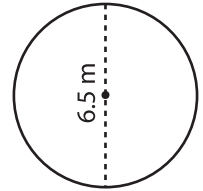
2)



Radius = _____

Diameter = _____

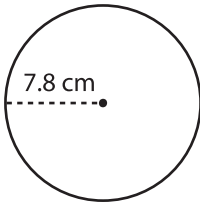
3)



Radius = _____

Diameter = _____

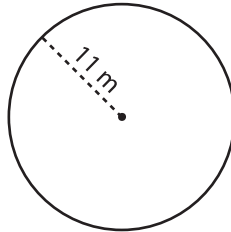
4)



Radius = _____

Diameter = _____

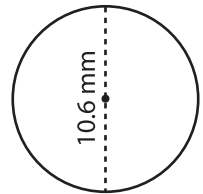
5)



Radius = _____

Diameter = _____

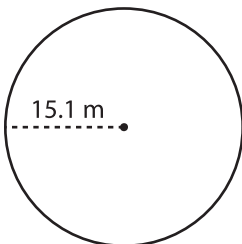
6)



Radius = _____

Diameter = _____

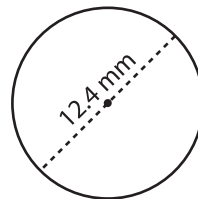
7)



Radius = _____

Diameter = _____

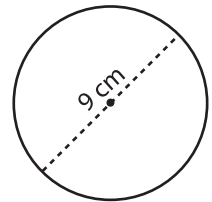
8)



Radius = _____

Diameter = _____

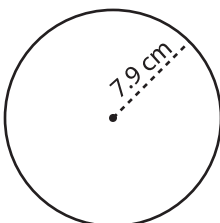
9)



Radius = _____

Diameter = _____

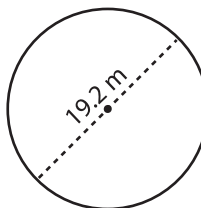
10)



Radius = _____

Diameter = _____

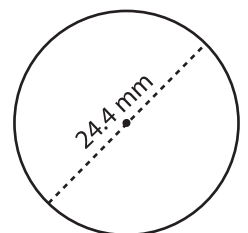
11)



Radius = _____

Diameter = _____

12)



Radius = _____

Diameter = _____