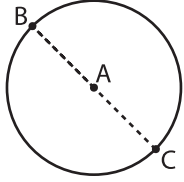


Parts of a Circle

Identify the parts of each circle.

1)

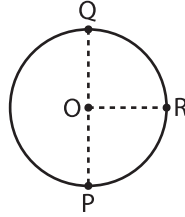


Center = _____

Radius = _____

Diameter = _____

2)

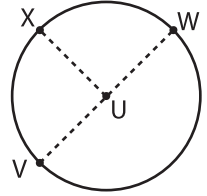


Center = _____

Radius = _____

Diameter = _____

3)

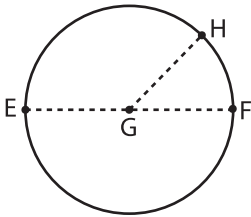


Center = _____

Radius = _____

Diameter = _____

4)

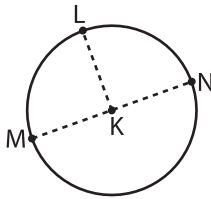


Center = _____

Radius = _____

Diameter = _____

5)

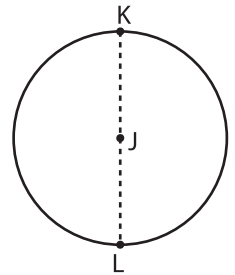


Center = _____

Radius = _____

Diameter = _____

6)

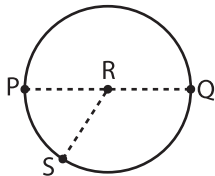


Center = _____

Radius = _____

Diameter = _____

7)

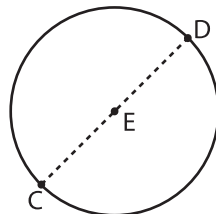


Center = _____

Radius = _____

Diameter = _____

8)

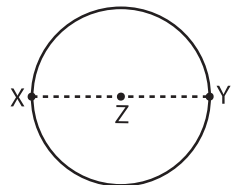


Center = _____

Radius = _____

Diameter = _____

9)



Center = _____

Radius = _____

Diameter = _____