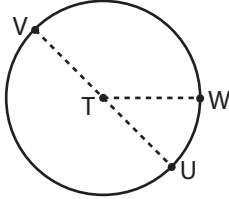


Parts of a Circle

Identify the parts of each circle.

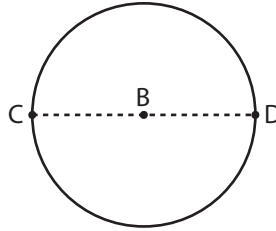
1)



Center = _____

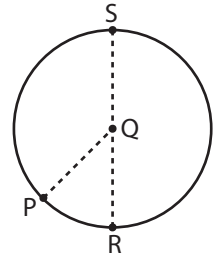
Dia

2)



Center = _____

3)



Center = _____

4)

Preview

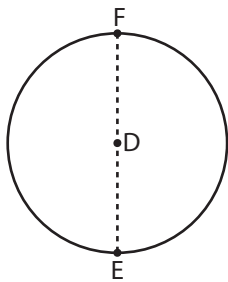
Become a member to unlock
unrestricted access to both printable
and online worksheets.



www.tutoringhour.com

Dia

7)

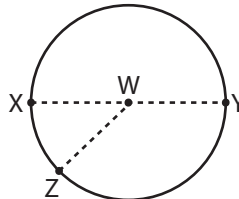


Center = _____

Radius = _____

Diameter = _____

8)

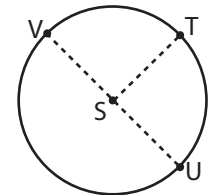


Center = _____

Radius = _____

Diameter = _____

9)



Center = _____

Radius = _____

Diameter = _____