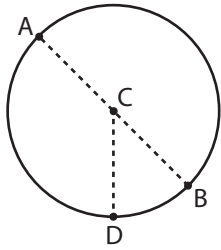


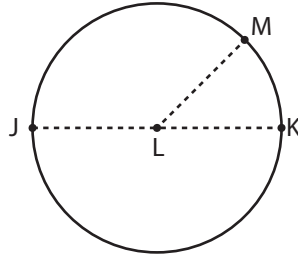
Parts of a Circle

Identify the parts of each circle.

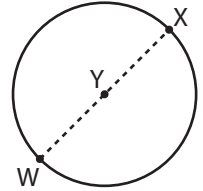
1)



2)



3)



Center = _____

Center = _____

Center = _____

Dia

Preview

Become a member to unlock
unrestricted access to both printable
and online worksheets.

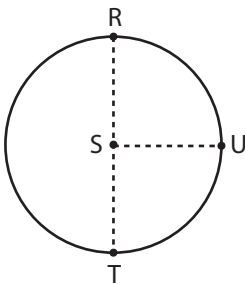


www.tutoringhour.com

4)

Dia

7)

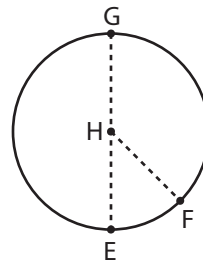


Center = _____

Radius = _____

Diameter = _____

8)

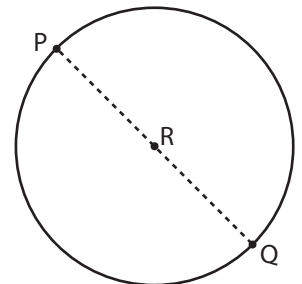


Center = _____

Radius = _____

Diameter = _____

9)



Center = _____

Radius = _____

Diameter = _____