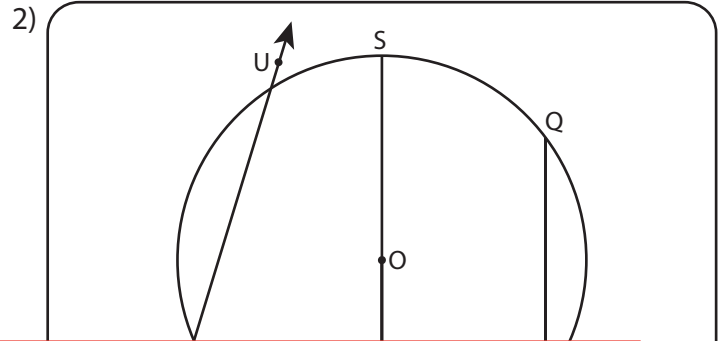
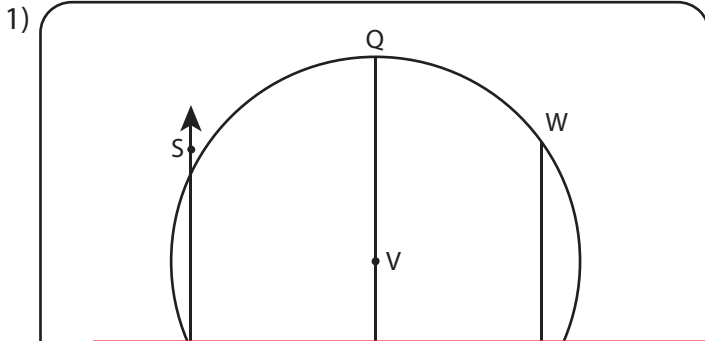


Parts of a Circle

Identify the parts of each circle.



Preview

Become a member to unlock
unrestricted access to both printable
and online worksheets.



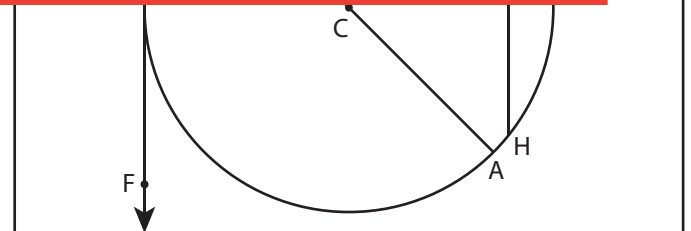
www.tutoringhour.com



Center = _____ Chord = _____

Radius = _____ Tangent = _____

Diameter = _____ Secant = _____



Center = _____ Chord = _____

Radius = _____ Tangent = _____

Diameter = _____ Secant = _____