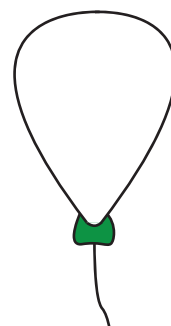


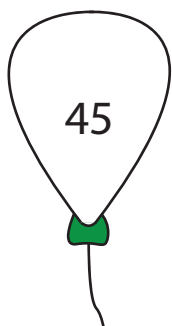


# Counting Backward by 5s

Count backward by 5s and write the missing numbers.

1)



2)

## Preview

Become a member to unlock  
unrestricted access to both printable  
and online worksheets.

3)

[www.tutoringhour.com](http://www.tutoringhour.com)



4)

