

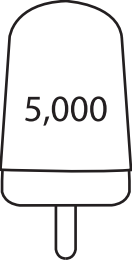

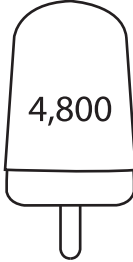


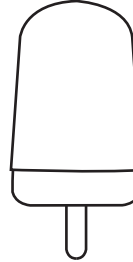

Counting Backward by 100s

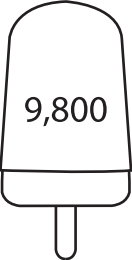






A) Count backward by 100s, and write the missing numbers.

- 1) 1,000, 900, 800, _____, _____, _____, _____, _____.
- 2) 3,200, 3,100, 3,000, _____, _____, _____, _____, _____.
- 3) 7,900, 7,800, 7,700, _____, _____, _____, _____, _____.

B) Count backward by 100s, and fill in the missing numbers on each popsicle.

- 1)

						
--	--	--	--	---	--	--
- 2)

						
---	---	---	---	--	---	---

C) Count backward by 100s, and complete each number line.

- 1)

←							→
	1,400		1,200			900	800
- 2)

←						→
	6,700		6,500		6,200	
- 3)

←						→
	8,600	8,500		8,200		8,000