

Counting Backward by 6s

A) Count backward by 6s, and write the missing numbers.








1) 60, 54, 48, _____, _____, _____, _____, _____.

2) 114, 108, 102, _____, _____, _____, _____, _____.








3) 138, 132, 126, _____, _____, _____, _____, _____.

B) Count backward by 6s, and fill in the missing numbers on each gift box.

1)

						
42		30			12	

2)

						
168	162		150		138	

C) 1) Where will you land if you start at 66 and skip backward by 6s four times?

2) What is the pattern if you start at 84 and skip backward by 6s six times?

3) If you start at 36 and skip backward by 6s until you reach 6, how many skips did you take?
