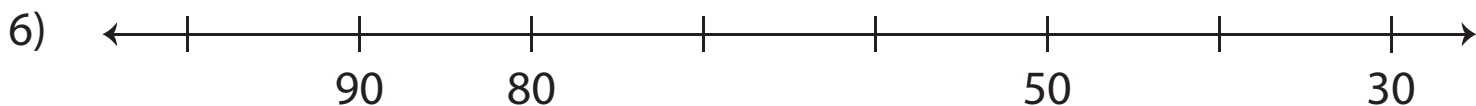
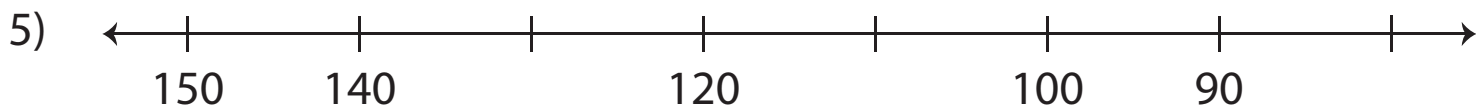
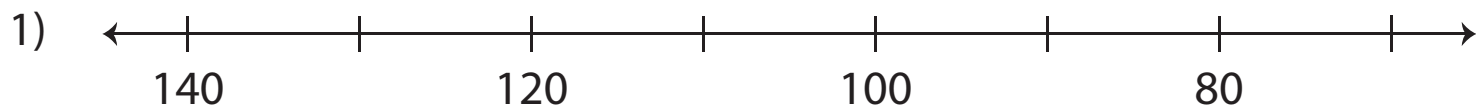


# Counting Backward by 10s

Count backward by 10s and complete each number line.



# Preview

Become a member to unlock  
unrestricted access to both printable  
and online worksheets.



[www.tutoringhour.com](http://www.tutoringhour.com)