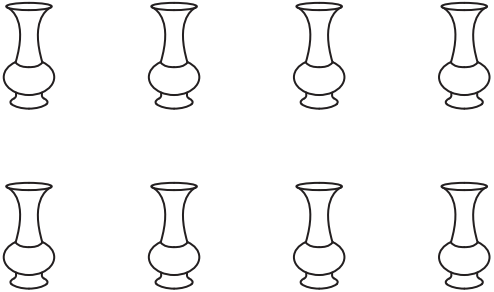




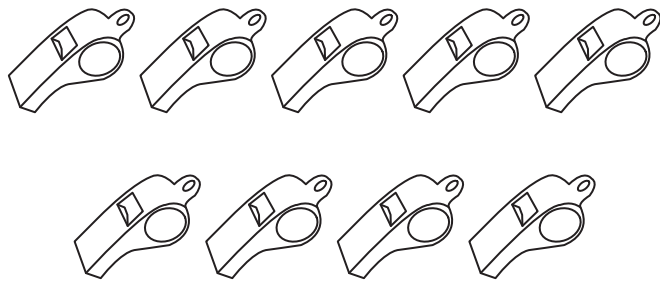


# Counting to 10

Count the number of pictures in each set, and circle the correct number.

<p>1)</p>  <p><b>6      7      8      9</b></p>	<p>2)</p>  <p><b>2      3      4      5</b></p>
<p>3)</p>  <p><b>2      3      4      5</b></p>	<p>4)</p>  <p><b>7      8      9      10</b></p>
<p>5)</p>  <p><b>7      8      9      10</b></p>	<p>6)</p>  <p><b>6      7      8      9</b></p>