
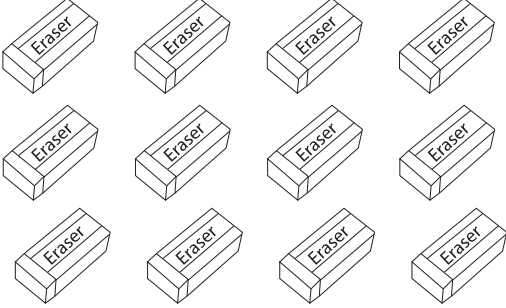



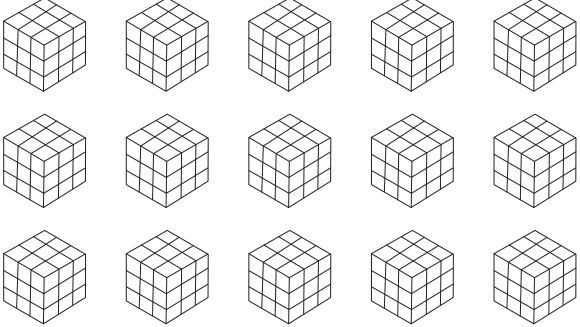


Counting and Cardinality

Count the number of objects in each set, and circle the correct number.

<p>1)</p>  <p>12 13 14 15</p>	<p>2)</p>  <p>10 11 12 13</p>
<p>3)</p>  <p>11 12 13 14</p>	<p>4)</p>  <p>17 18 19 20</p>
<p>5)</p>  <p>8 9 10 11</p>	<p>6)</p>  <p>15 16 17 18</p>