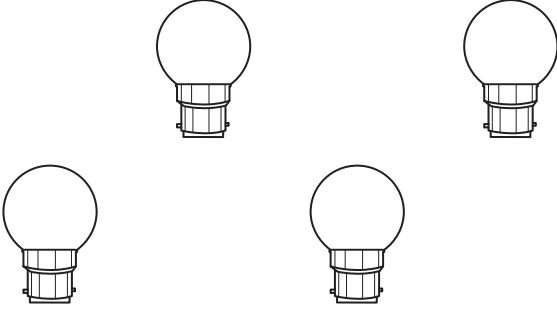




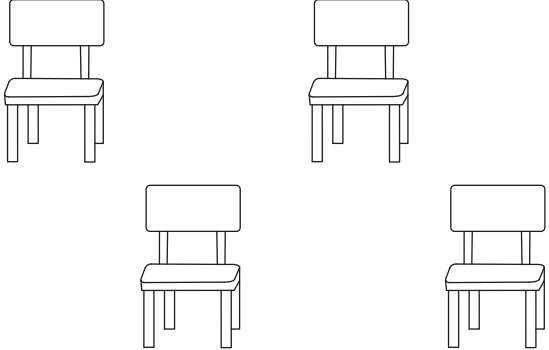


# Counting to 5

Count the number of pictures in each set, and circle the correct number.

<p>1)</p>  <p><b>1    2    3    4    5</b></p>	<p>2)</p>  <p><b>1    2    3    4    5</b></p>
<p>3)</p>  <p><b>1    2    3    4    5</b></p>	<p>4)</p>  <p><b>1    2    3    4    5</b></p>
<p>5)</p>  <p><b>1    2    3    4    5</b></p>	<p>6)</p>  <p><b>1    2    3    4    5</b></p>