








More vs. Fewer

<p>1) On a nature walk, Andrea collected some acorns and pine cones. Which of these did Andrea collect more?</p> <p><input type="checkbox"/> pine cones</p> <p><input type="checkbox"/> acorns</p>	<p>Acorns</p> 	<p>Pine Cones</p> 
<p>2) Ethan and Emily are back from their Easter egg hunt. Whose basket has fewer Easter eggs?</p> <p><input type="checkbox"/> Ethan's</p> <p><input type="checkbox"/> Emily's</p>	<p>Emily's Basket</p> 	<p>Ethan's Basket</p> 
<p>3) Hannah baked donuts and waffles. Which of these did she bake more?</p> <p><input type="checkbox"/> donuts</p> <p><input type="checkbox"/> waffles</p>	<p>Donuts</p> 	<p>Waffles</p> 
<p>4) Ness and Elsa both have fish bowls in their rooms. Whose bowl has fewer fish?</p> <p><input type="checkbox"/> Ness's</p> <p><input type="checkbox"/> Elsa's</p>	<p>Ness's Fish Bowl</p> 	<p>Elsa's Fish Bowl</p> 