

# One More or One Less

---

A) Write the number that is one more than the given number.

1) 6 \_\_\_\_\_

2) 27 \_\_\_\_\_

3) 94 \_\_\_\_\_

4) 39 \_\_\_\_\_

5) 45 \_\_\_\_\_

6) 81 \_\_\_\_\_

B) Write the number that is one less than the given number.

1) \_\_\_\_\_ 72

2) \_\_\_\_\_ 63


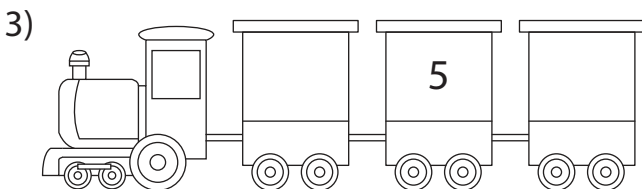

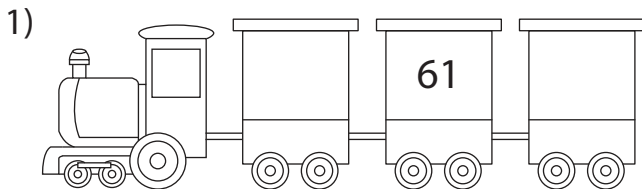
3) \_\_\_\_\_ 35

4) \_\_\_\_\_ 18

5) \_\_\_\_\_ 59

6) \_\_\_\_\_ 4

C) Write the number that is one less and one more than each given number on the railroad cars.



# One More or One Less

Answer Key

A) Write the number that is one more than the given number.

1) 6      7

2) 27      28

3) 94      95

4) 39      40

5) 45      46

6) 81      82

B) Write the number that is one less than the given number.

1)      71      72

2)      62      63

3)      34      35

4)      17      18

5)      58      59

6)      3      4

C) Write the number that is one less and one more than each given number on the railroad cars.

