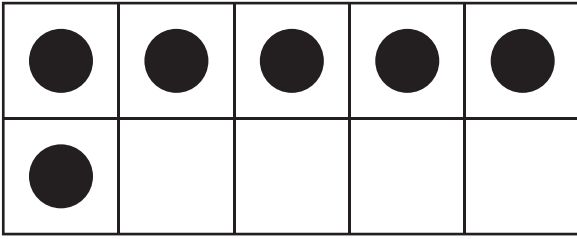


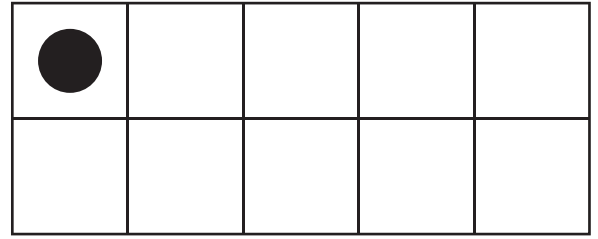
Ten Frames | Counting to 10

How many counters are there in each ten frame?

1)



2)



3)

Preview

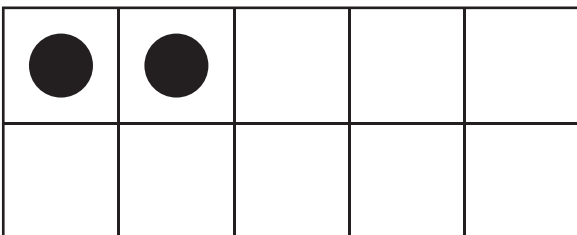
Become a member to unlock
unrestricted access to both printable
and online worksheets.



www.tutoringhour.com

5}

7)



8)

