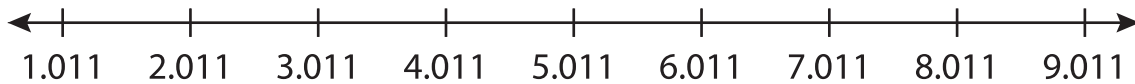


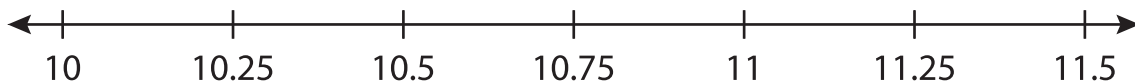
Adding Decimals Using Number Lines

Draw hops on each number line and complete the addition sentence.


1) $2.011 + 6 = \underline{\hspace{2cm}}$



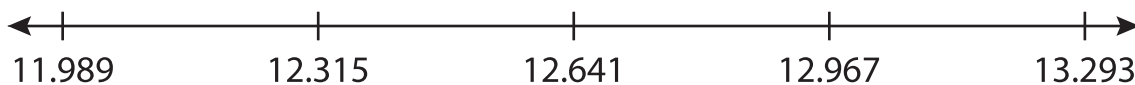
2) $10 + 1.25 = \underline{\hspace{2cm}}$



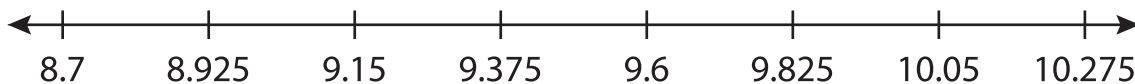
3) $5.13 + 0.57 = \underline{\hspace{2cm}}$



4) $12.315 + 0.978 = \underline{\hspace{2cm}}$



5) $8.7 + 0.9 = \underline{\hspace{2cm}}$



6) $3.8 + 2.5 = \underline{\hspace{2cm}}$

