


Adding Decimals Using Number Lines

Draw hops on each number line and complete the addition sentence.

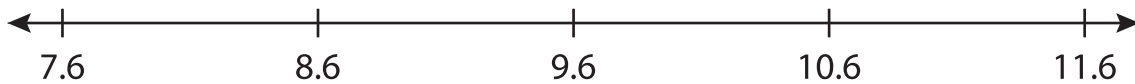
1) $17.14 + 0.48 = \underline{\hspace{2cm}}$



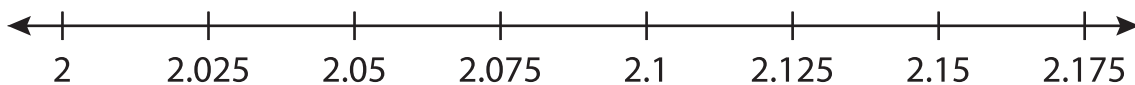
2) $15.05 + 2.5 = \underline{\hspace{2cm}}$



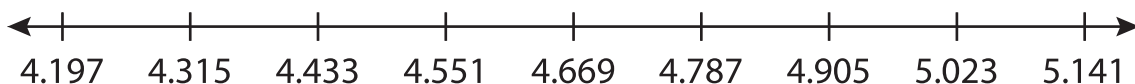
3) $8.6 + 3 = \underline{\hspace{2cm}}$



4) $2 + 0.15 = \underline{\hspace{2cm}}$



5) $4.197 + 0.944 = \underline{\hspace{2cm}}$



6) $8.5 + 1 = \underline{\hspace{2cm}}$

