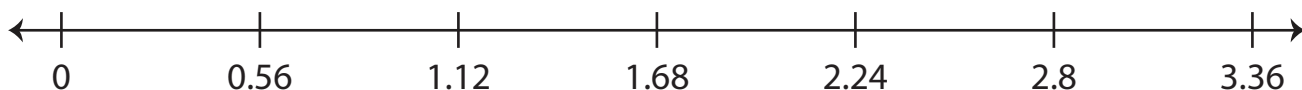


## Dividing Decimals Using Number Lines

Indicate hops on each number line and complete the division sentence.

1)  $2.8 \div 0.56 = \underline{\hspace{2cm}}$




2)  $11.24 \div 2.81 = \underline{\hspace{2cm}}$


3)

4)

5)  $25.7 \div 5.14 = \underline{\hspace{2cm}}$



6)  $8.58 \div 1.43 = \underline{\hspace{2cm}}$



# Preview

Become a member to unlock  
unrestricted access to both printable  
and online worksheets.



[www.tutoringhour.com](http://www.tutoringhour.com)