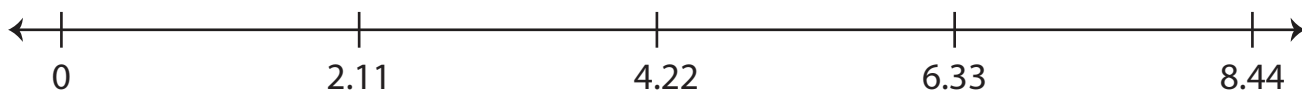


## Dividing Decimals Using Number Lines

Indicate hops on each number line and complete the division sentence.

1)  $2.11 \div 2.11 = \underline{\hspace{2cm}}$

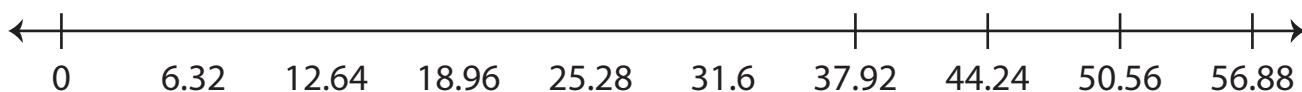


2)  $23.65 \div 4.73 = \underline{\hspace{2cm}}$

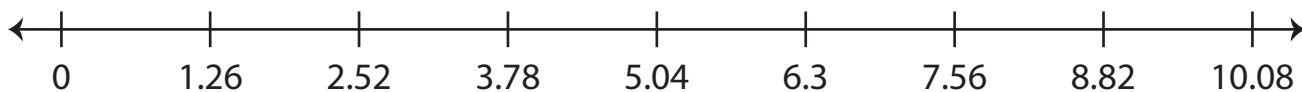
3)

4)

5)  $44.24 \div 6.32 = \underline{\hspace{2cm}}$



6)  $5.04 \div 1.26 = \underline{\hspace{2cm}}$



# Preview

Become a member to unlock  
unrestricted access to both printable  
and online worksheets.



[www.tutoringhour.com](http://www.tutoringhour.com)