


Dividing Decimals Using Number Lines

Indicate hops on each number line and complete the division sentence.

1) $2.67 \div 0.89 = \underline{\hspace{2cm}}$

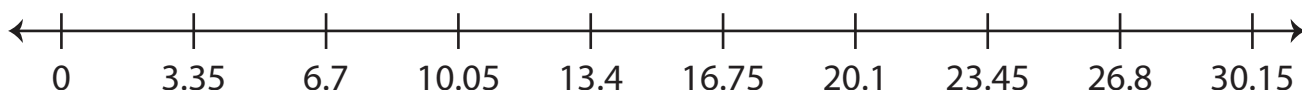


2) $15.42 \div 2.57 = \underline{\hspace{2cm}}$

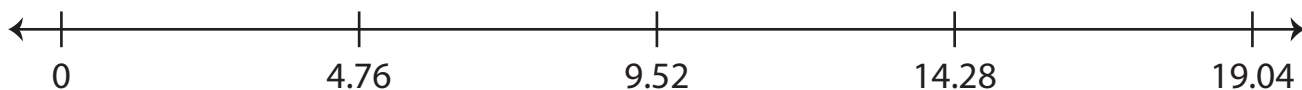
3)

4)

5) $26.8 \div 3.35 = \underline{\hspace{2cm}}$



6) $4.76 \div 4.76 = \underline{\hspace{2cm}}$



Preview

Become a member to unlock
unrestricted access to both printable
and online worksheets.



www.tutoringhour.com